

social studies paper – II

(MODEL QUESTION PAPER-2)

SUMMATIVE ASSEMENT – III FOR SSC(2016-2017)

Time : 2.45 Mi.

Max.Marks: 40

Instructions:

1. 15 minutes are allotted to read the question paper
2. Part – A must be answered in a separate Answer sheet.
3. Students must be answered in a separate Answer Sheet.
4. Map and Part – B (Bit paper) should be tagged to the answer sheet and be given to the invigilator.
5. Bit Paper should be given alongwith the Question paper.

---

Time : 2.15

PART – A

Marks: 30

---

SECTION – 1

Note(a) Write answers to the FOUR questions given below in one or Two sentences.

- a) Each question carries ONE mark.  $4 \times 1 = 4$
1. List out the Allied powers, Axis powers, and Central powers of the both world wars.(As-1)
  2. who established communist party in Vietnam?
  3. write the names of Indian border countries.(As-5)
  4. Discribe the any best two features of RTI(As-6)

SECTION - II

Note:

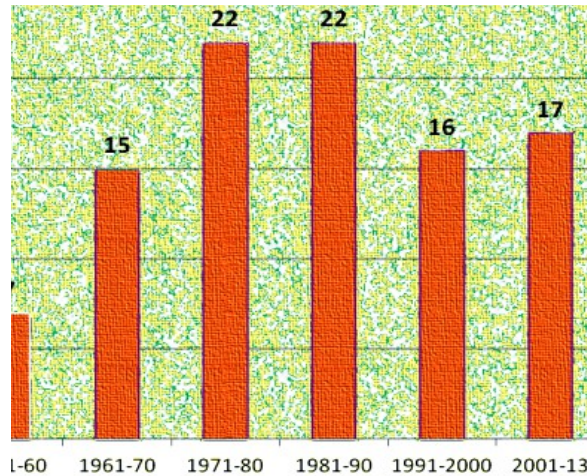
- Write answers to the FIVE questions

Each questions carries TWO marks

$5 \times 2 = 10$

5. Does agressive nationalism, Imperilism, Power Mongolism, Militarism still exist?(As-6)
6. write a note on Yassar Arafat`s PLO(Palestenian Liberation Organisation)(As-1)

7. The Vietnamese Peasants played a crucial role in the Independence of Vietnam. What were the steps taken up by their government for their benefit? Explain.(As-1)
8. Read the graph given below and answer the following questions.(As-3)  
(The graph indicates about the Constitutional Amendments of India)



- Questions: i. Since the constitution was adopted, how many amendments were made so far?
- ii. During which period maximum, and minimum amendments were made?

9. What are the common features of social movements?(As-1)

### SECTION - III

Note:

- Write answers to the any FOUR questions given below
- Each question has internal choice. you can choose any one.

Each question carries FOUR marks.

- 10 (A) Read the para given below and answer the following question  
(As-2)

After the death of Lenin in 1924, Stalin emerged as the leader of the Communist Party. Over the next decade, he established his absolute control and put an end to all opposition. He used his undisputed power to build the economy of USSR.

Question: How Russia emerged as supreme power under the leadership of Stalin.

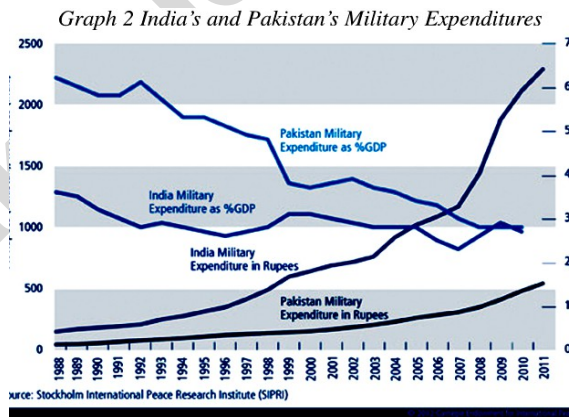
(Or)

(B) Read the para given below and answer the following Question.

A number of National and Regional parties have to come together to form Government at the centre. While this enabled the Central Government to become more sensitive to multiple view points in politics and policy matters, it is also caused instability.

Question: "Coalition Governments are responsible for the political instability", write your comment.

11 (A) Observe the graph given below and write a para on military expenditure of Pakistan.(As-3)



(Or)

(B) Read the table given below and answer the following questions

s/no	Name of the Party	year 1952	year 1962
1	Indian National Congress	364	361
2	Communist Party of India	16	29

3	Socialist Party	12	12
4	Kisan Mazdur Party	9	-----
5	People`s Democratic Front	7	-----
6	Ganatantra Parishad	6	-----
7	Others	38	27
8	Independents	37	20
9	Jana Sangh	-----	12
10	Praja Socialist Party	-----	12
11	DMK	-----	7

Questions:

- i. which political Parties got their majority in 1962 than in 1952?
- ii. which political parties had disappeared till 1962?
- iii. During 1952 and 1962 which political parties lost their seats?
- iv. Which parties got least seats both 1952 and 1962?

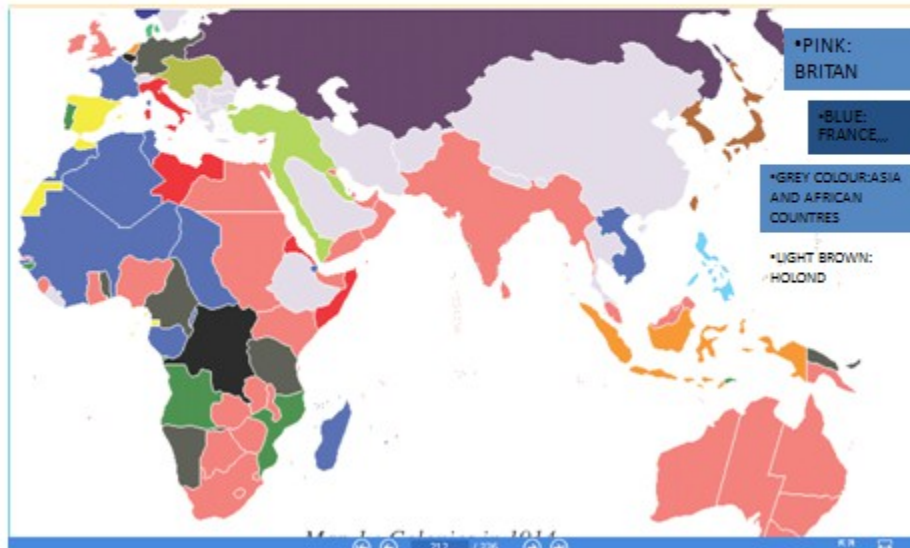
12(A) In what ways did the land reform programme help CCP to win the war?

(Or)

(B) what is the impact of five year plans in the development of India?

13 (A) Look at the map of colonies given below and answer the following questions.

EUROPIAN COUNTRIES ESTABLISHED CONTROL OVER LATIN AMERICAN AND ASIAN COUNTRIES BY 19th CENTURY.



Questions:

- i. Identify one Asian and one African colony of Britain.
- ii. identify one Asian and one African colony of Holond
- iii. Identify one Asian one African colony of France
- iv. Ideintify two Asian one African country that was not colony of any power.

(Or)

(B)Locate following places in given India Map.

- i. New Dilhi
- ii. Leh
- iii. Jaipur
- iv. Trivendrum

---

PART - B

TIME: 30Mnts

Marks. 20X1/2=10

---

Instructions:

- i. write the CAPITAL LETTERS showing the correct answer for the following questions in the bracets provided against each question.

- ii. Each question carries ½ mark.
  - iii. marks will not be awarded in case of any over writing and rewriting or erased answers.
- 

14. which one of these countries belongs to Triple Alliance? ( )  
A) Great Britain                      B) Germany C) China              D) USA
15. Archduke Franz Ferdinand belonged to this country ( )  
A) Austria                      B) Serbia                      C) Poland                      D) Bulgaria
16. The Term “ collectivisation” means? ( )  
A) Collecting Weapons                      B) Collective Farming  
C) Collective War                      D) Collecting people
17. Explain Holocaust? ( )  
A) Mass scale unemployment                      B) Industrial Breakdown  
C) Moss Execution of Jews                      C) Revolution of Workers
- 18) In the begining 20th century china was ruled by emperors of----- ( )  
A) Manchu Dynasty                      B) Ming Dynasty  
C) Kachi Dynasty                      D) Chola dynasty
19. which of the following is true with reference to the Vietnam War? ( )
1. As USA had advanced technology so it won the war
  2. The United States got support from the whole world.
  3. United States used all type of chemical weapons during the war
  4. The USA failed to achieve its objectives during the war.
- A) only 1, 2 are True                      B) Only 2 and 3 are True

- C) Only 3 and 4 are True D) All of the above
- 20) Cabinet Mission came to India in ----- ( )  
A) February 1946 B) August 1946  
C) March 1946 C) June 1946
21. Tebaga movement started at ( )  
A) Orissa B) Bengal C) Hyderabad D) Kerala
22. The 29th state of India is ----- ( )  
A) Andhra Pradesh B) Arunachal Pradesh  
C) Telangana D) Jharkand
23. we should appreciate secularism because ( )  
A) It treats all religions as official religions  
B) It is neutral in religious matters  
C) It is against to any religion  
D) All the above
- 24) The first Priminister of India is ( )  
A) Nehru B) Patel C) Indira gandhi D)I.K Gujal
- 25) which Indian state opposed Hindhi ( )  
A) Kerala B) Andhra pradesh C)Tamilnadu D) Assam
26. Rajiv Gandhi was assasinated by ----- ( )  
A) Maoists B) Taliban Terrosists C) Sikh militants D) LTTE
27. The founder of Telugu Desam party is ( )  
A) N.T Ramarao B) N. Chandrababu Naidu C) Y.S.R D)K.C.R

28. Laksha Depps are located to India in this directions ( )  
A) East                      B) West                      C) South                      D) North
29. India fought against Pakistan in 1971 for the liberation of ( )  
A) Azad Kashmir              B) Bangladesh              C) Poonch Sector              D) Siachin
30. Whch of the following is not correct in related to Silent Vally Movement? ( )  
A) This movement was against consturction of a dam across two rivers in silent vally.  
B) This project may disturb the existence of rare species of animals like Lion tailed Mascque.  
C) KKSSP took intiative to organize movement  
D) Above all
31. RTI ensures ----- in functining of government bodies ( )  
A) Problems              B) transparaency              C) Development              D) Change
32. RTI was approved by Indian Government on ( )  
A) 2005                      B) 2006                      C) 2007                      D) 2008
33. The following Information cannot be revealed ( )  
A) About Sports                      B) about movie awards  
C) about the Health Status of politicians              D) Cabinet records before decision is taken